


★ ☆ Space Math ☆ ★


Look at the numbers on the top of the rocket.
Then, circle the numbers below each rocket
that add up to the number on the top.



$21+13$

$19+16$


$18+16$



$50+17$

$32+45$

$29+48$



$26+22$

$30+18$

$17+29$