


# SHAPE EXPLOSION

Some whole shapes got exploded into equal parts!  
Which shape in each pair exploded into smaller shares?  
Circle the correct number of shares for that shape.



1

2

4




**BANG!**




4

5

2




**BOOM!**




6

4

8



**POW**



10

4

8