

DOUBLE FACTS: Total Matching. Part II

Solve the equations below.


Trace on the dotted line to the correct total.

14



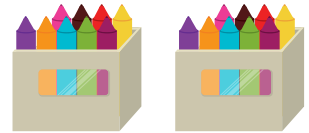
$$7 + 7 = ?$$

$$8 + 8 = ?$$



16

20




$$9 + 9 = ?$$

$$10 + 10 = ?$$



18

18



$$6 + 6 = ?$$

$$9 + 9 = ?$$



12