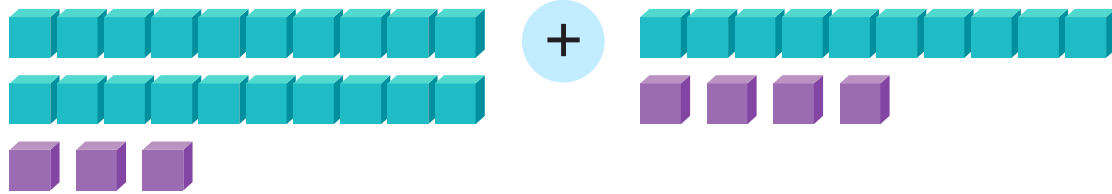


Counting Tens and Ones: Part I

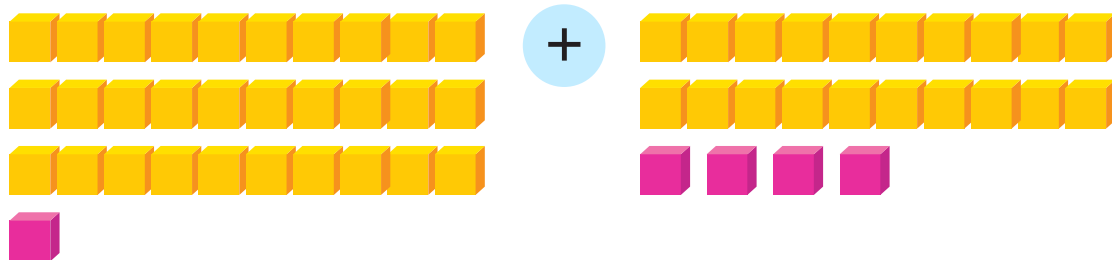
Count longs and cubes in each number sentence.
How many tens and ones are there in total? Check the correct answer.



3 tens
and 7 ones

4 tens
and 7 ones

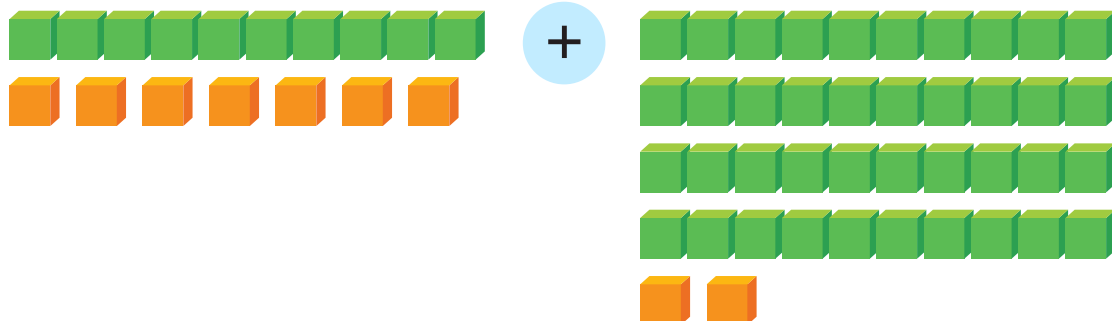
7 tens
and 3 ones



3 tens
and 5 ones

6 tens
and 6 ones

5 tens
and 5 ones



5 tens
and 9 ones

6 tens
and 9 ones

9 tens
and 5 ones