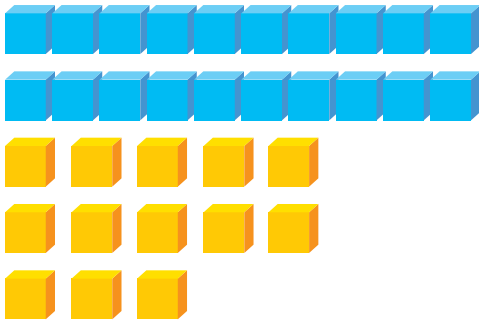


Trading Ones for Tens


Trade ones for tens and regroup the following numbers. Check the correct answers.



2 tens and 13 ones equals _____.

3 tens and
9 ones


3 tens and
3 ones



1 ten and 16 ones equals _____.

2 tens and
6 ones


6 tens and
2 ones



4 tens and 10 ones equals _____.

4 tens and
5 ones

5 tens and
0 ones



7 tens and 19 ones equals _____.

7 tens and
9 ones

8 tens and
9 ones