


Different Ways to Add


Which equation matches the model with base ten blocks?
Trace on the dotted line to the correct answer.

$$\begin{array}{r} 13 \\ +43 \\ \hline 56 \end{array}$$




$$\begin{array}{r} 14 \\ +33 \\ \hline 47 \end{array}$$

$$\begin{array}{r} 45 \\ +21 \\ \hline 66 \end{array}$$



$$\begin{array}{r} 54 \\ +21 \\ \hline 75 \end{array}$$

$$\begin{array}{r} 35 \\ +52 \\ \hline 87 \end{array}$$



$$\begin{array}{r} 35 \\ +25 \\ \hline 60 \end{array}$$