


Count and Subtract

Use the picture and addition equation to solve the subtraction equation. Check the correct answer.

$3 + 1 = 4$

$4 - 1 = \underline{\quad}$




3

1

0

$2 + 4 = 6$

$6 - 4 = \underline{\quad}$



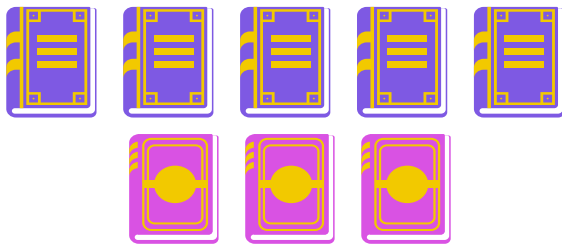
1

2

4

$5 + 3 = 8$

$8 - 3 = \underline{\quad}$



3

4

5

$8 + 2 = 10$

$10 - 2 = \underline{\quad}$



8

6

5