


Understanding Pictures as Equations

Check all the equations that match each picture.




$3+5=8$

$9-5=4$

$4+6=10$

$8-5=3$




$3+5=8$

$8-4=4$

$4+4=8$

$8-5=3$



$4+5=9$

$3+4=7$

$9-5=4$

$10-7=3$



$6+3=9$

$10-8=2$

$2+8=10$

$7-2=5$