


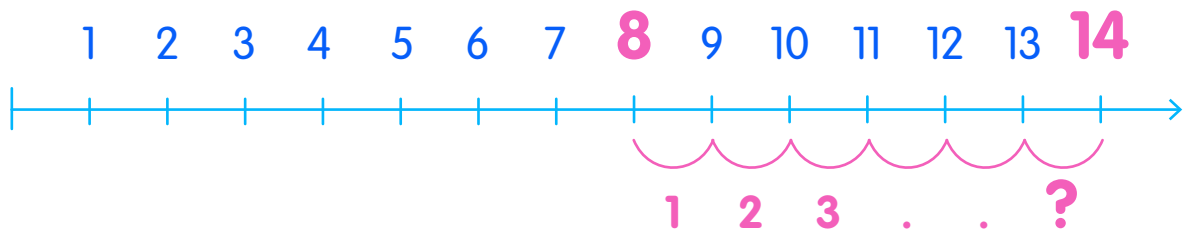
Solving Problems with Number Lines

Read the problem. Use the number line to count on and find the solution. Check the correct answer.

Mary went for a 14-day trip to a summer camp. She has been at the summer camp for 8 days so far. How many more days is Mary going to stay in the summer camp?



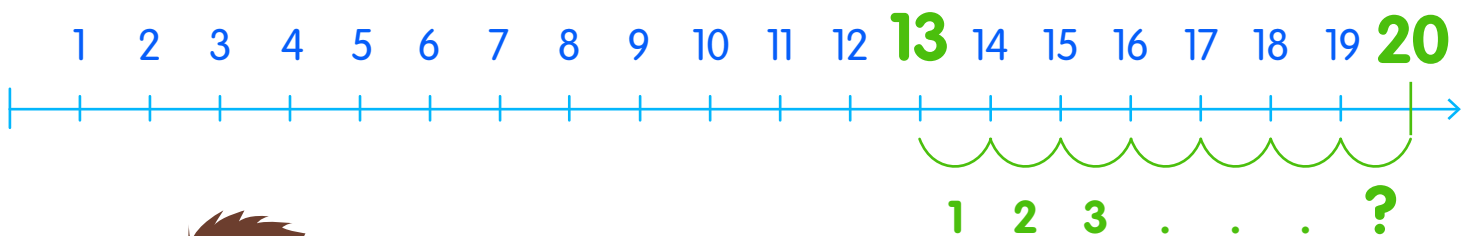
$$8 + ? = 14$$



- 6 7 8

Mike is playing a video game. He's got 13 points. He needs to have a total of 20 points to go to the next level. How many more points does Mike need?

$$13 + ? = 20$$



- 10 7 5