



What Shape Am I?

Read each sentence. Check the shape that matches the description.

1. I have 3 sides and 3 angles.



rhombus



triangle




rectangle


2. I have no angles.



circle




hexagon



trapezoid


3. I have 6 sides 6 angles.



pentagon



triangle




hexagon

4. I have 4 equal sides.



rectangle



trapezoid



square