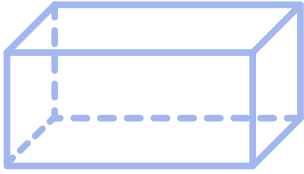




Let's Count Faces!



Count the faces of the 3D shapes with the wizard. Circle the correct number of faces for each 3D shape.



3

4

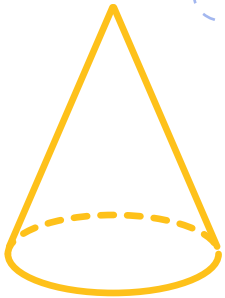
6



2

4

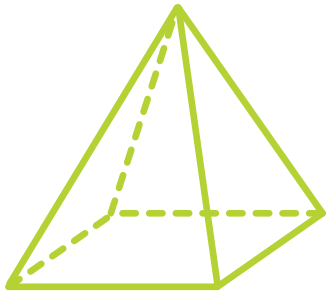
5



1

3

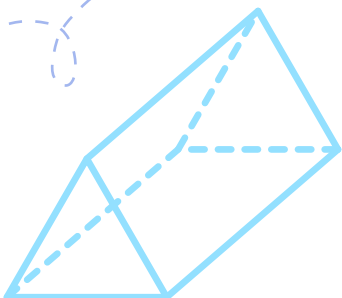
2



7

5

6



4

8

5

