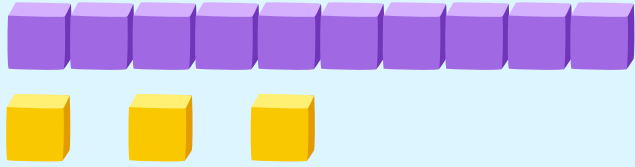


Counting with Base Ten Blocks

Count the blocks and check the correct number!

$1 \text{ ten} + 3 \text{ ones} = ?$




13

15

16

$1 \text{ ten} + 5 \text{ ones} = ?$




11

19

15

$1 \text{ ten} + 2 \text{ ones} = ?$

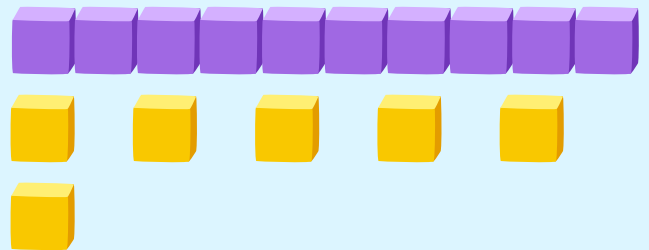


12

17

19

$1 \text{ ten} + 6 \text{ ones} = ?$




13

15

16

$1 \text{ ten} + 1 \text{ one} = ?$

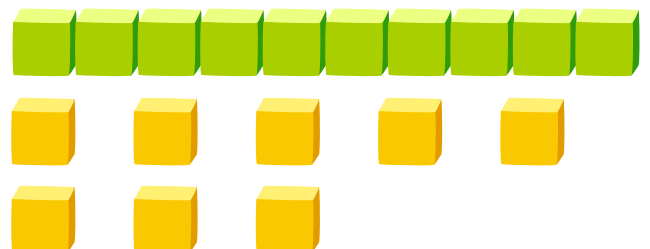


10

11

12

$1 \text{ ten} + 8 \text{ ones} = ?$



18

14

17