




Comparing Number Representations

Compare numbers in each pair and circle the correct symbol, $>$ greater than, $<$ less than, $=$ equal.

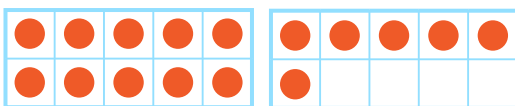
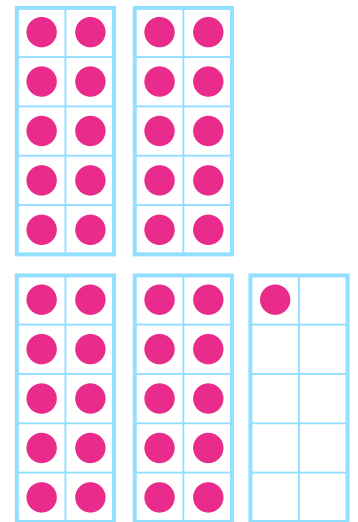
the correct symbol, $>$ greater than, $<$ less than, $=$ equal.



$>$ $=$ $<$



$>$ $=$ $<$



$>$ $=$ $<$

