



# Addition and Subtraction:

## Assessment 1

Check the box next to the correct answer.

1.  +  = 

3

10

9

2.  $3 + 3 =$  

5

6





7

3.  $4 + 4 =$  

7

8

9

4.  +  +  = 

$4 + 3 = 7$

$4 + 13 = 17$

$4 + 14 = 18$

5.  +  +  = 

18

20

21