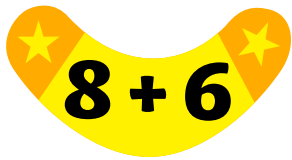
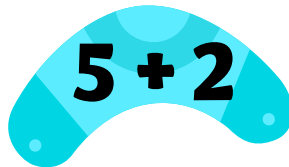


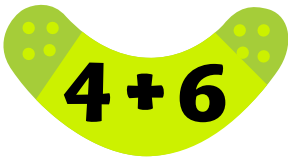
# Boomerang Addition: Commutative Property Practice

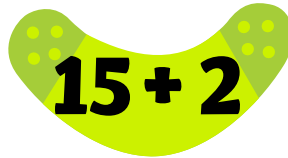
In each column circle two boomerangs that have the same sum.  
Use the commutative property to find them.

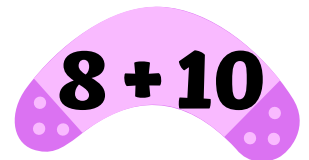
 $8 + 6$


 $5 + 2$

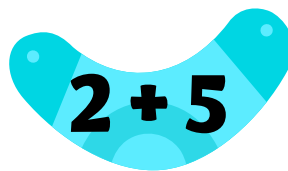
 $11 + 9$

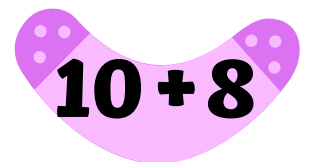
 $4 + 6$

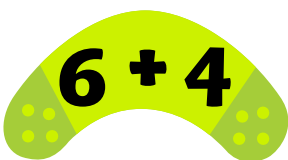
 $15 + 2$

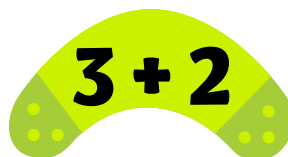
 $8 + 10$

 $6 + 2$

 $2 + 5$

 $10 + 8$

 $6 + 4$

 $3 + 2$

 $9 + 10$