



Addition and Subtraction Equations

Look at the pictures and circle if you'd add or subtract. Then underline the correct equation.



+

$18 + 8 = 26$

$18 - 8 = 10$

-

$10 + 2 = 12$

$10 - 2 = 8$



+


$15 + 7 = 22$

$10 - 8 = 2$

-

$6 + 6 = 12$

$15 - 7 = 8$



+


$15 + 4 = 19$

$19 - 5 = 14$

-

$14 + 3 = 17$

$11 - 4 = 7$



+

$7 + 5 = 12$

$4 - 4 = 0$

-

$12 + 2 = 14$

$12 - 2 = 10$

