







# Chapter 1: Place Value

## Assessment Part 2



Which group of tens can you trade for a 100?  
Check the correct answers.



Which number is correctly written in another form?  
Check the correct answers.

**45**

**5+5**

**45+5**

**30+5**

**40+5**

**90+2**

**22**

**92**

**102**

**112**