


# Let's Regroup!

Solve the equations below using regrouping. Trace on the dotted line to the correct total.





$38 + 19 = ?$

57

53

$29 + 24 = ?$





$33 + 38 = ?$

71

74

$56 + 18 = ?$



$27 + 16 = ?$

45

43

$19 + 26 = ?$

