


# Subtracting Numbers:

## MUSIC



Find the musical note that makes the subtraction sentence true. Trace on the dotted line to the correct answer.

397



$$\begin{array}{r} 786 \\ - \quad ? \\ \hline 389 \end{array}$$


403



475



91



$$\begin{array}{r} 215 \\ - 124 \\ \hline ? \end{array}$$


111



139



244



$$\begin{array}{r} 803 \\ - \quad ? \\ \hline 547 \end{array}$$


256



266



380



$$\begin{array}{r} 574 \\ - \quad 94 \\ \hline ? \end{array}$$

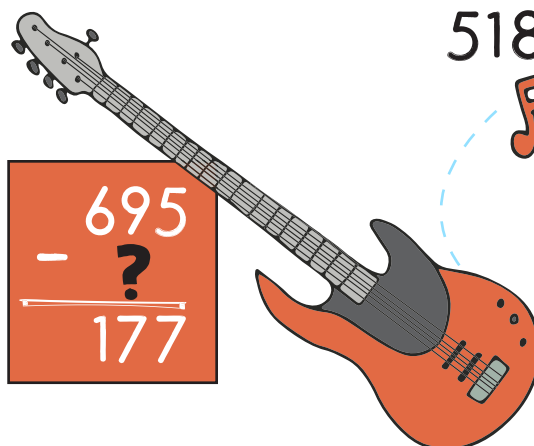
420



480



518



$$\begin{array}{r} 695 \\ - \quad ? \\ \hline 177 \end{array}$$

522



872

