


Rounding Numbers Up

This science researcher observed animals in the rainforest and recorded exactly how many she saw of each type of animal. Help her by rounding the total number for each animal **up to the nearest 10**. Circle the correct answer.



gorilla

76

70

80

90



jaguar

29

10

20

30




sloth

68

60

70

80




toucan

85

70

80

90



tiger

16

20

10

30