



Fraction Quest

Check the fraction that each shape represents.




$\frac{1}{2}$

$\frac{1}{3}$



$\frac{2}{4}$

$\frac{1}{4}$



$\frac{1}{3}$

$\frac{1}{2}$



$\frac{3}{5}$

$\frac{4}{5}$