





Number Line FUN!



Check off the correct fraction
for each point on the number line.




$1/3$

$1/2$



$2/4$

$2/3$



$1/3$

$3/4$