


DIVIDING NUMBERS: Blast Off!

Assessment 2 Circle the correct answer to each problem.


1. 
 $4 \overline{) 12}$



2

4

3


2. 
 $5 \overline{) 20}$

4

3

6



3. 
 $4 \overline{) 32}$



6

8

9


4. 3 astronauts went to outer space. They found 27 new planets. The astronauts shared the new planets equally. How many planets did each astronaut visit?

5

9

7

10



5. 5 scientists were building model spaceships. They built 40 model spaceships. Then, they shared the model spaceships equally. How many model spaceships did each astronaut get?

6

11

8

9

