




# Identify Quadrilaterals


Look at the shapes on the left. In each row, check the correct type of quadrilateral.



Rectangle

Rhombus

Square



Rectangle

Rhombus


Square



Rectangle

Rhombus

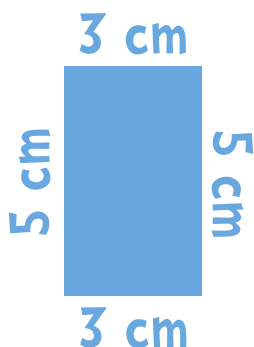
Square



Rectangle

Rhombus

Square



Rectangle

Rhombus

Square