


Addition and Subtraction Equations

Look at the pictures and circle if you'd add or subtract. Then underline the correct equation.



+


-

$$18 + 8 = 26$$

$$10 + 2 = 12$$

$$18 - 8 = 10$$

$$10 - 2 = 8$$



+


-

$$15 + 7 = 22$$

$$6 + 6 = 12$$

$$10 - 8 = 2$$

$$15 - 7 = 8$$



+


-

$$15 + 4 = 19$$

$$14 + 3 = 17$$

$$19 - 5 = 14$$

$$11 - 4 = 7$$



+

-

$$7 + 5 = 12$$

$$12 + 2 = 14$$

$$4 - 4 = 0$$

$$12 - 2 = 10$$

