

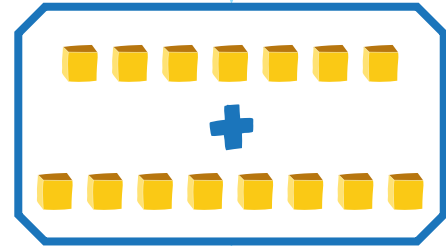
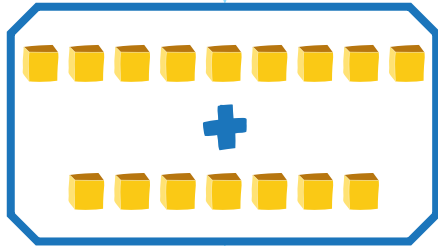
ADDITION EQUATIONS with Base 10 Blocks

Draw a line to connect the base 10 blocks to the equation they correctly represent.

$$7 + 8 = 15$$



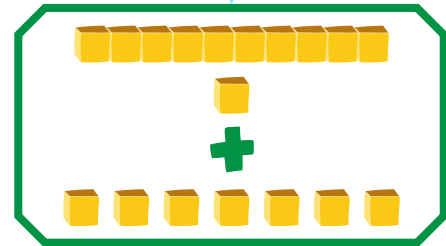
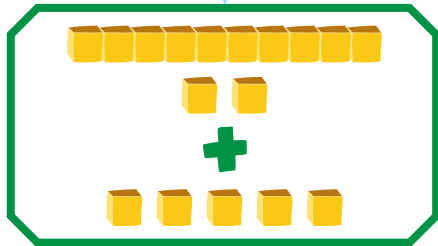
$$9 + 7 = 16$$



$$12 + 5 = 17$$



$$11 + 7 = 18$$



$$16 + 3 = 19$$



$$18 + 2 = 20$$

