


# Cherry Number Bonds


Look at the cherries and leaves below. The leaves show the sums and the cherries show the addends. What is the missing addend? Circle the correct answer.



3

4


5



6

2

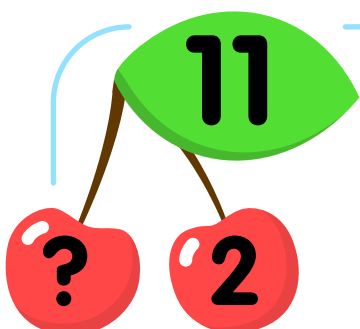
4



2

3

1



7

9

10