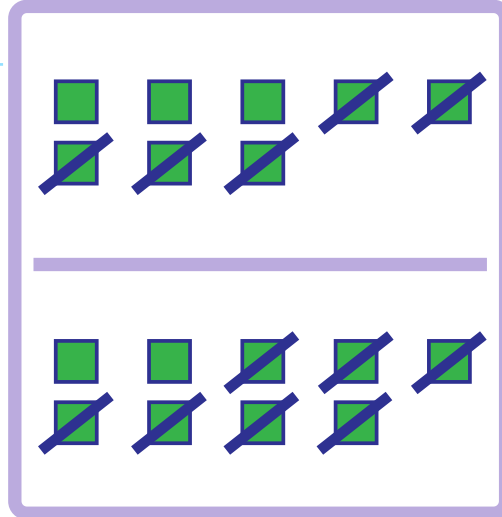


MATCHING SUBTRACTION EQUATIONS to Base 10 Models

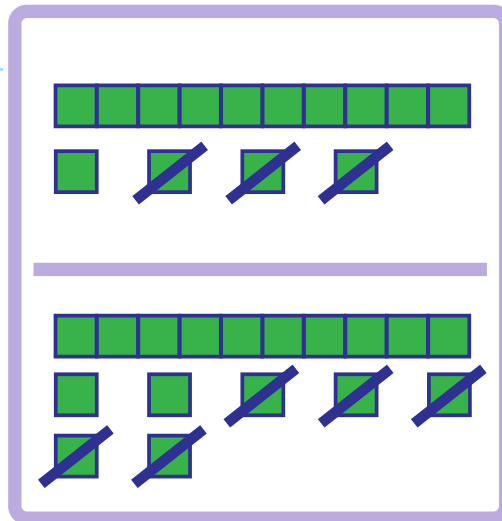
Draw a line to the equation that matches the subtraction shown with the base 10 blocks.

$$9 - 7 = 2$$



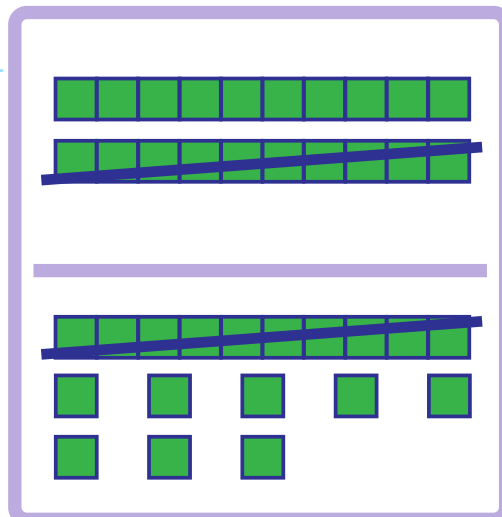
$$8 - 5 = 3$$

$$14 - 3 = 11$$



$$17 - 5 = 12$$

$$18 - 10 = 8$$



$$20 - 10 = 10$$