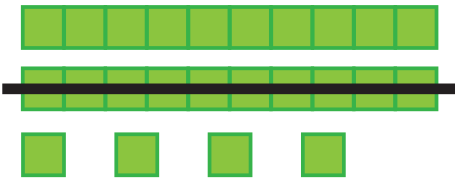




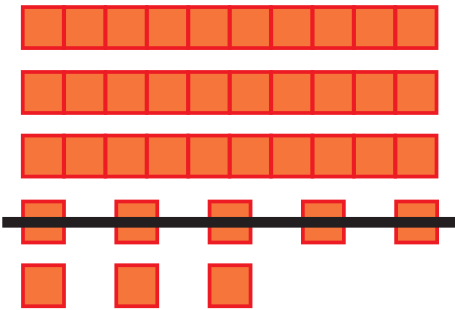
Which is Correct?

Look at the subtraction models with base ten blocks. The blocks that are taken away are crossed out. Check the number sentences that match the models.



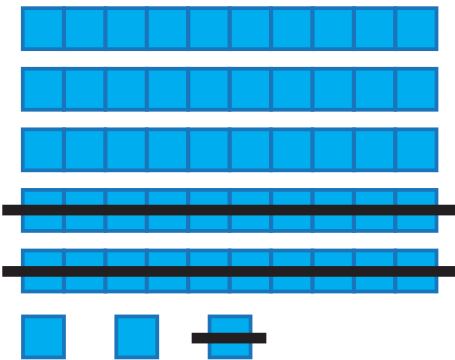
$24 - 10 = 14$

$22 - 14 = 10$



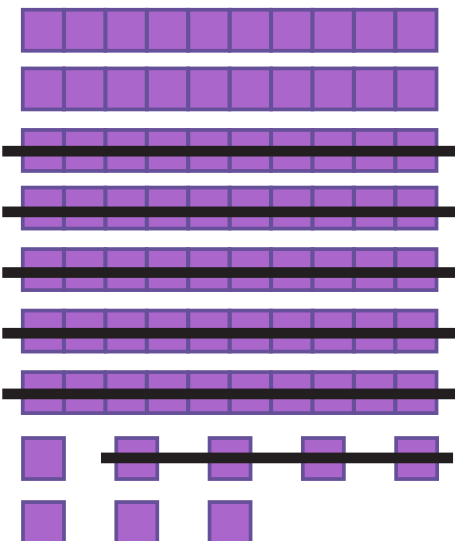
$37 - 15 = 22$

$38 - 5 = 33$




$35 - 12 = 23$

$53 - 21 = 32$



$88 - 44 = 44$

$78 - 54 = 24$



$96 - 36 = 60$

$96 - 60 = 36$

