


# HALVES AND FOURTHS FOR THE HOUSE

Look at the windows on the alien's house. Below you will see the windows too. Circle the parts you need to make each window, then count the number of parts and check the correct answer.





NUMBER OF PARTS




2

3


1

2

2

4

3

4