



NAME PARTS OF THE PIES

Mark's mother made 4 pies.
She cut each of them into equal parts.
Help Mark name the equal parts for each pie.
Check the correct answers.

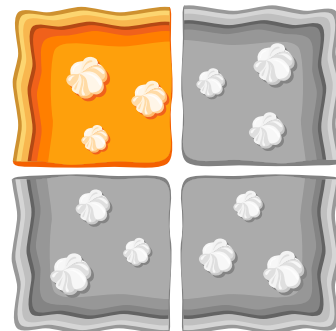
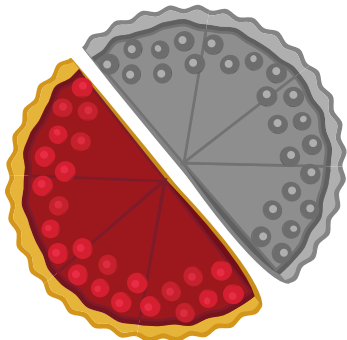


a half of the pie

a half of the pie

a fourth of the pie

a quarter of the pie



a half of the pie

a half of the pie

a quarter of the pie

a fourth of the pie