


Turn Around Dominos


Look at each fact. Which domino has the same total? Check the correct answer.




$3 + 1 = 4$




$2 + 1 = 3$




$1 + 3 = 4$




$3 + 2 = 5$




$2 + 4 = 6$




$4 + 2 = 6$



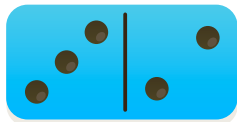
$5 + 2 = 7$




$4 + 4 = 8$




$5 + 1 = 6$



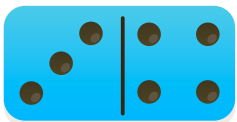
$3 + 2 = 5$



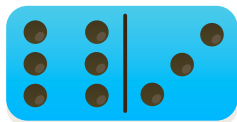
$2 + 5 = 7$




$1 + 5 = 6$



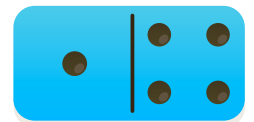
$3 + 4 = 7$



$6 + 3 = 9$



$4 + 3 = 7$



$1 + 4 = 5$