




# Compare and Describe Part 2

Check numbers near the objects to order them by length.  
Check 3 near the longest object. Check 1 near the shortest one.  
Then answer the questions and check the right answers.

	1	2	3
	<input type="checkbox"/>	<input type="checkbox"/>	<input type="checkbox"/>
	<input type="checkbox"/>	<input type="checkbox"/>	<input type="checkbox"/>
	<input type="checkbox"/>	<input type="checkbox"/>	<input type="checkbox"/>

1. Which object is the shortest?

bat

bottle

2. Which object is the longest?

umbrella

bat

3. Which object is shorter than the bat?

bottle

umbrella