

Comparing with a Third Object

Check the longer object in each pair.

Answer the questions. Check the correct answers.



Which is longer,
the pen or the brush?

pen




brush



Which is shorter,
the paper clip or the chalk?

paper
clip

chalk



Which is longer,
the key or the spoon?

spoon

key