

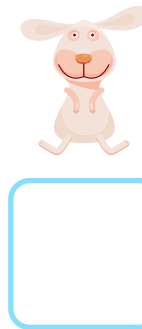



Money Word Problems: at the Pet Shop

Solve the word problems below.



Mia has these coins in her purse. Which two toys could she buy for **exactly** the amount of money she has? Tick the correct pictures.



Sophia buys the parrot and the bunny. How much does she pay?
Circle the correct answer.

15¢

17¢

14¢



Noah buys the kitten. He pays with a dime. How much money does he have left? Circle the correct answer.



1¢

2¢

0¢