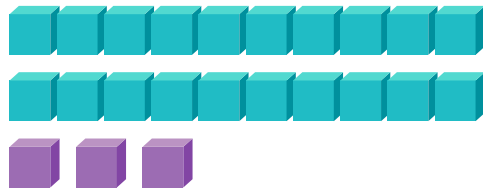


Counting Tens and Ones: Part I

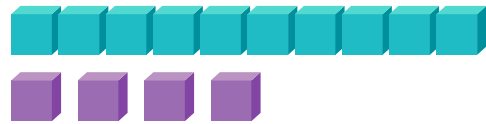


Count longs and cubes in each number sentence.

How many tens and ones are there in total? Check the correct answer.




+




3 tens
and 7 ones

4 tens
and 7 ones

7 tens
and 3 ones



+




3 tens
and 5 ones

6 tens
and 6 ones

5 tens
and 5 ones



+



5 tens
and 9 ones

6 tens
and 9 ones

9 tens
and 5 ones