


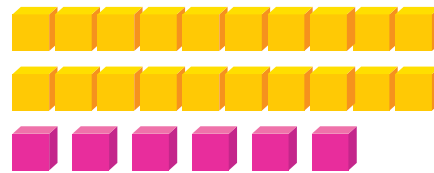
Counting Tens and Ones: Part II



Count longs and cubes in each number sentence.
How many tens and ones are there in total? Check the correct answer.



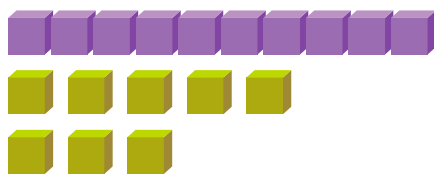
+




6 tens
and 4 ones

8 tens
and 6 ones

7 tens
and 8 ones




+




8 tens
and 8 ones

7 tens
and 8 ones

8 tens
and 7 ones



+



8 tens
and 9 ones

9 tens
and 9 ones

9 tens
and 8 ones