





Fruity Problem Solving

Mary bought 4 lemons, 5 oranges and 6 apples.
Check the correct picture of the fruit Mary bought.



Answer the questions. Circle the correct solutions.

How many oranges and lemons did Mary buy?

10

9

12

How many apples and oranges did Mary buy?

11

13

8

How many pieces of fruit did Mary buy in all?

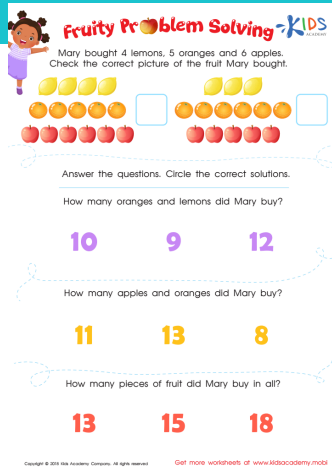
13

15

18

Worksheet Answer Key.

Scan the QR code to get the answer key for this worksheet. In it, you'll also find an explanation of how to solve the worksheet and additional learning resources.



Complete this worksheet online.

Scan the QR code below to open this interactive worksheet!

Let your child learn and play! The worksheet comes with a professional voice over of the task, and will be automatically checked and scored upon completion. Your child will also get suggestions of similar activities.



You can open this online worksheet in any browser and on any device. NO registration or app installation is needed to start learning. Just scan the QR code and there you are!

Ready to learn more? Use the code below to access a free lesson!

Interactive games, educational videos, online quizzes and our full worksheet collection – check it all out now!

For Students and Parents



Check out this free Trial Lesson with fun worksheets for kids!



<https://www.kidsacademy.com/tg/>

For Schools and Teachers



<https://www.kidsacademy.com/classroom/>