

LIGHT SOURCE COUNTING

Read the word problem and check the correct answer. Use the pictures to help.

1. How many natural light sources do you see?



Sun



Fire



Stars



Firefly




Lightning

5

4

6

2. How many manmade light sources do you see?



Flashlight



Neon sign





Table lamp



Television

5

4

6