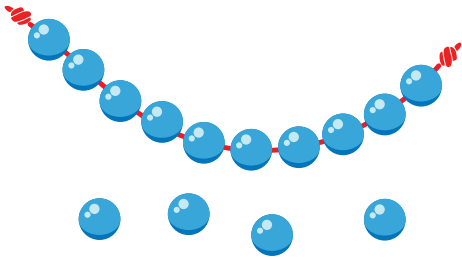


# Practice Place Value


Look at the models below. Pearls on the string represent tens, and the single pearls represent ones. Circle the number each model shows.



14

41


16



72

27

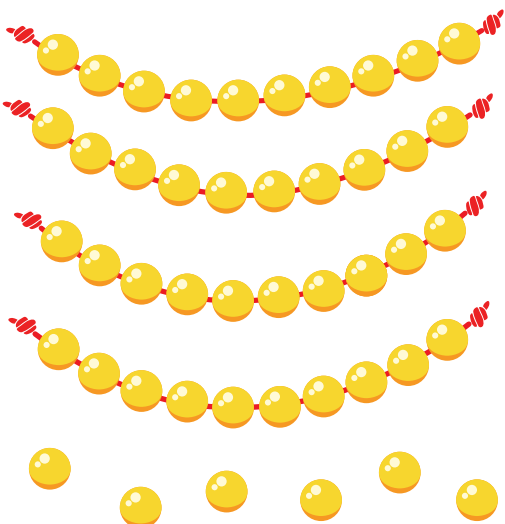
37



15

23

32





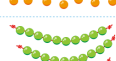
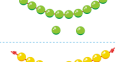
10

46

76

## Worksheet Answer Key.

Scan the QR code to get the answer key for this worksheet. In it, you'll also find an explanation of how to solve the worksheet and additional learning resources.

Practice Place Value			
Look at the models below. Pearls on the string represent tens, and the single pearls represent ones. Circle the number each model shows.			
	14	41	16
	72	27	37
	15	23	32
	10	46	76



## Complete this worksheet online.

Scan the QR code below to open this interactive worksheet!

Let your child learn and play! The worksheet comes with a professional voice over of the task, and will be automatically checked and scored upon completion. Your child will also get suggestions of similar activities.



You can open this online worksheet in any browser and on any device. NO registration or app installation is needed to start learning. Just scan the QR code and there you are!

## Ready to learn more? Use the code below to access a free lesson!

Interactive games, educational videos, online quizzes and our full worksheet collection – check it all out now!



<https://www.kidsacademy.com/tg/>



<https://www.kidsacademy.com/classroom/>