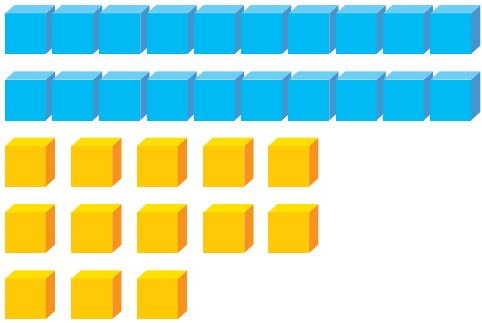


# Trading Ones for Tens


Trade ones for tens and regroup the following numbers. Check the correct answers.



2 tens and 13 ones equals \_\_\_\_.

3 tens and  
9 ones


3 tens and  
3 ones



1 ten and 16 ones equals \_\_\_\_.

2 tens and  
6 ones


6 tens and  
2 ones



4 tens and 10 ones equals \_\_\_\_.

4 tens and  
5 ones

5 tens and  
0 ones



7 tens and 19 ones equals \_\_\_\_.

7 tens and  
9 ones

8 tens and  
9 ones