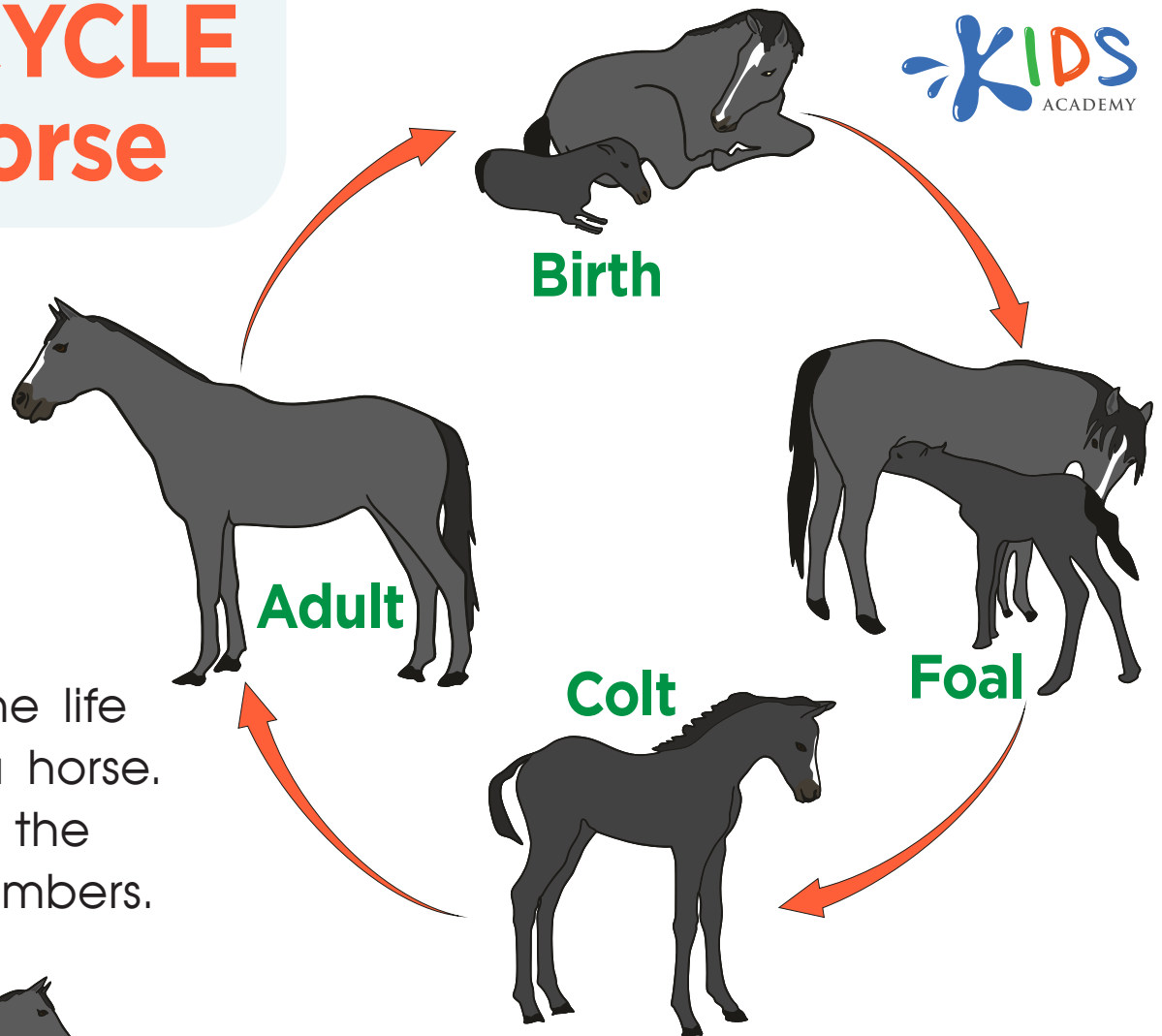




LIFE CYCLE of a Horse




Number the life cycle of a horse. Check off the correct numbers.




<input type="checkbox"/>	1	<input type="checkbox"/>	2	<input type="checkbox"/>	3	<input type="checkbox"/>	4
--------------------------	---	--------------------------	---	--------------------------	---	--------------------------	---



<input type="checkbox"/>	1	<input type="checkbox"/>	2	<input type="checkbox"/>	3	<input type="checkbox"/>	4
--------------------------	---	--------------------------	---	--------------------------	---	--------------------------	---



<input type="checkbox"/>	1	<input type="checkbox"/>	2	<input type="checkbox"/>	3	<input type="checkbox"/>	4
--------------------------	---	--------------------------	---	--------------------------	---	--------------------------	---



<input type="checkbox"/>	1	<input type="checkbox"/>	2	<input type="checkbox"/>	3	<input type="checkbox"/>	4
--------------------------	---	--------------------------	---	--------------------------	---	--------------------------	---