



# Adding Flower Petals

Read each word problem and check the picture that matches. Then, underline the correct equation.

1.

Paulie was counting the petals of his 3 sunflowers. He counted **10** yellow petals on one flower. On the next flower, he counted **8** petals. On his last sunflower, he counted **12** petals. How many petals do the sunflowers have altogether?





$$10 + 8 + 12 = 30$$

$$10 + 5 + 12 = 30$$



2.

Meggie was counting the petals of her daisies. She counted **14** purple petals on one flower. On the next flower, she counted **10** pink petals. On the last flower, she counted **12** more purple petals. How many petals do the daisies have combined?



$$18 + 6 + 10 = 24$$

$$14 + 10 + 12 = 36$$

