




Equal Groups: Assessment 2


Count the objects in the arrays.
Trace a line to the correct equation.



$3+3+3=9$

$4+4+4=9$



$4+4=8$



$2+2+2+2=8$

$5+5=10$

$3+3+3+3=12$



$5+5+5=15$

$4+4+4+4=16$

$4+4+4+4=15$

