


# Garage Sale: "Less Than" Problems

A family is having a garage sale. Read each word problem. Check the equation that matches. Then, circle the answer.



28



?

1. Leshawn and his sister are selling their stuffed animals they've collected. Leshawn sold 28 stuffed animals. His sister sold 15 less than he did. How many stuffed animals did Leshawn's sister sell?

$$28 - 15 = ?$$


$$28 + 15 = ?$$

10  
stuffed  
animals

13  
stuffed  
animals

43  
stuffed  
animals

34



?

2. Aunt Tina and mom are selling old jewelry. Aunt Tina sells 34 pieces of jewelry. Mom sells 4 fewer pieces of jewelry than Aunt Tina. How many pieces of jewelry did mom sell?

$$34 - 4 = ?$$

$$34 - 14 = ?$$

0  
pieces of  
jewelry

31  
pieces of  
jewelry

30  
pieces of  
jewelry

## Worksheet Answer Key.

Scan the QR code to get the answer key for this worksheet. In it, you'll also find an explanation of how to solve the worksheet and additional learning resources.

**Garage Sale: "Less Than" Problems**

A family is having a garage sale. Read each word problem. Check the equation that matches. Then, circle the answer.

1. Leshawn and his sister are selling their stuffed animals they've collected. Leshawn sold 28 stuffed animals. His sister sold 15 less than he did. How many stuffed animals did Leshawn's sister sell?

28-15=?    28+15=?

10 stuffed animals    13 stuffed animals    43 stuffed animals

2. Aunt Tina and mom are selling old jewelry. Aunt Tina sells 34 pieces of jewelry. Mom sells 4 fewer pieces of jewelry than Aunt Tina. How many pieces of jewelry did mom sell?

34-4=?    34+14=?

0 pieces of jewelry    31 pieces of jewelry    30 pieces of jewelry

Copyright © 2017 Kids Academy Company. All rights reserved. Get more worksheets at [www.kidsacademy.com](http://www.kidsacademy.com)



## Complete this worksheet online.

Scan the QR code below to open this interactive worksheet!

Let your child learn and play! The worksheet comes with a professional voice over of the task, and will be automatically checked and scored upon completion. Your child will also get suggestions of similar activities.



You can open this online worksheet in any browser and on any device. NO registration or app installation is needed to start learning. Just scan the QR code and there you are!

## Ready to learn more? Use the code below to access a free lesson!

Interactive games, educational videos, online quizzes and our full worksheet collection – check it all out now!


**For Students and Parents**

Check out this free Trial Lesson with fun worksheets for kids!

Lesson 2: Counting to 120 starting at any number

Counting 100 120

Video    Worksheet    Quiz    Game



**For Schools and Teachers**

Great! Now your students can use the code below to join the classroom.

7008

COPY ACCESS LINK

Estimated classroom time: 21 min

Me 4:28 min    You 4:28 min    All 4:28 min    All 4:28 min    All 0:00

Counting 100 120    Counting 100 120    Counting 100 120    Counting 100 120    Counting 100 120



<https://www.kidsacademy.com/tg/>

<https://www.kidsacademy.com/classroom/>