




Hot Air Balloon Math

Solve the addition problems below. Circle the correct total.



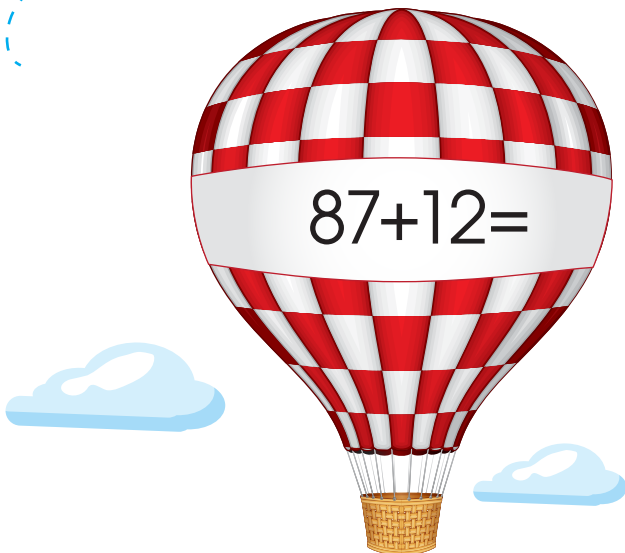
$$43 + 30 =$$

12

13

23

73



$$87 + 12 =$$

99

75

100

80



$$24 + 13 =$$

41


17

37

39

Worksheet Answer Key.

Scan the QR code to get the answer key for this worksheet. In it, you'll also find an explanation of how to solve the worksheet and additional learning resources.



Hot Air Balloon Math

Solve the addition problems below. Circle the correct total.

$43+30=$	12	13
$87+12=$	23	73
$24+13=$	99	75
	100	80
	41	17
	37	39

Copyright © 2017 Kids Academy Company. All rights reserved. Get more worksheets at www.kidsacademy.com



Complete this worksheet online.

Scan the QR code below to open this interactive worksheet!

Let your child learn and play! The worksheet comes with a professional voice over of the task, and will be automatically checked and scored upon completion. Your child will also get suggestions of similar activities.



You can open this online worksheet in any browser and on any device. NO registration or app installation is needed to start learning. Just scan the QR code and there you are!

Ready to learn more? Use the code below to access a free lesson!

Interactive games, educational videos, online quizzes and our full worksheet collection – check it all out now!



For Students and Parents

Check out this free Trial Lesson with fun worksheets for kids!

Lesson 2: Counting to 120 starting at any number

Counting 100 120

Video Worksheet Quiz Game

<https://www.kidsacademy.com/tg/>



For Schools and Teachers

Great! Now your students can use the code below to join the class

7008

Code expires on: 00:00:00

COPY ACCESS LINK

Estimated classroom time: 21 min

Classroom list

Video Worksheet Quiz Game

<https://www.kidsacademy.com/classroom/>