

Sums and Differences within 100: Assessment 2

Read the word problem below. Check the correct equation.

There were 14 frogs on lily pads in a pond. Later in the day, 10 frogs hopped onto the lily pads. In the evening, 12 more frogs joined the group. How many frogs were there in total?

☐

$$14+10+12=37$$

☐

$$14+12+2=28$$

☐

$$14+10+12=36$$

☐


$$14+10+12=35$$

Sums and Differences Within 1 - Assessment 2 Worksheet



Worksheet Answer Key.


Scan the QR code to get the answer key for this worksheet. In it, you'll also find an explanation of how to solve the worksheet and additional learning resources.



Complete this worksheet online.

Scan the QR code below to open this interactive worksheet!

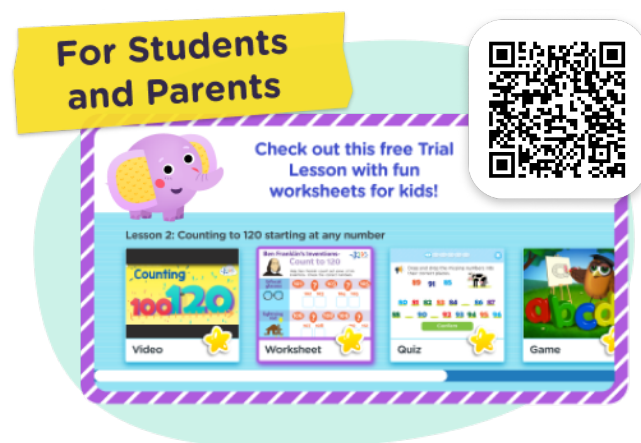
Let your child learn and play! The worksheet comes with a professional voice over of the task, and will be automatically checked and scored upon completion. Your child will also get suggestions of similar activities.



You can open this online worksheet in any browser and on any device. NO registration or app installation is needed to start learning. Just scan the QR code and there you are!

Ready to learn more? Use the code below to access a free lesson!

Interactive games, educational videos, online quizzes and our full worksheet collection – check it all out now!



<https://www.kidsacademy.com/tg/>



<https://www.kidsacademy.com/classroom/>