




Valentine's Day Word Problems

Solve the word problems below.
Answer the questions.



Paul had 20 chocolate candies. Then, he went to a sweet shop and bought 3 heart shaped lollipops, 2 heart shaped cookies and 5 Valentine cupcakes.

Check the number line that shows how to find how many total sweets Paul has now.



How many sweets does Paul have now? Check the correct total.

29

☐

19


☐

30

☐

Worksheet Answer Key.

Scan the QR code to get the answer key for this worksheet. In it, you'll also find an explanation of how to solve the worksheet and additional learning resources.



Complete this worksheet online.

Scan the QR code below to open this interactive worksheet!

Let your child learn and play! The worksheet comes with a professional voice over of the task, and will be automatically checked and scored upon completion. Your child will also get suggestions of similar activities.



You can open this online worksheet in any browser and on any device. NO registration or app installation is needed to start learning. Just scan the QR code and there you are!

Ready to learn more? Use the code below to access a free lesson!


Interactive games, educational videos, online quizzes and our full worksheet collection – check it all out now!

For Students and Parents



Check out this free Trial Lesson with fun worksheets for kids!

Lesson 2: Counting to 120 starting at any number



For Schools and Teachers



Great! Now your students can use the code below to join the class

Classroom Code: **7008**
Code expires on: 00:00:00
[COPY ACCESS LINK](#)



<https://www.kidsacademy.com/tg/>

<https://www.kidsacademy.com/classroom/>