


Fractions of Shapes

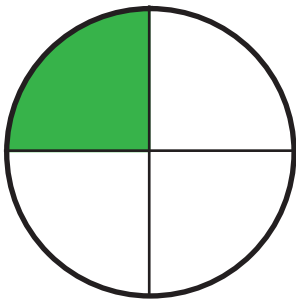
What fraction of the shape has been colored?
Circle the correct fraction.



$\frac{2}{3}$

$\frac{1}{2}$


$\frac{3}{4}$



$\frac{1}{2}$

$\frac{1}{4}$


$\frac{3}{4}$



$\frac{2}{3}$

$\frac{1}{3}$

$\frac{1}{2}$



$\frac{3}{4}$

$\frac{2}{3}$

$\frac{1}{4}$



$\frac{3}{4}$

$\frac{1}{2}$

$\frac{1}{4}$