

HOUSE FRACTIONS

Look at the windows on the house. Check the correct fraction for each window.



thirds
 $\frac{1}{3}$



fourths
 $\frac{1}{4}$



halves
 $\frac{1}{2}$



halves
 $\frac{1}{2}$



thirds
 $\frac{1}{3}$




fourths
 $\frac{1}{4}$




fourths
 $\frac{1}{4}$



halves
 $\frac{1}{2}$



thirds
 $\frac{1}{3}$




halves
 $\frac{1}{2}$



fourths
 $\frac{1}{4}$



thirds
 $\frac{1}{3}$



thirds
 $\frac{1}{3}$



fourths
 $\frac{1}{4}$



halves
 $\frac{1}{2}$